





1) Fill in the gaps for this question.



Tens	Ones
	
	

$2 \times 4 = \square$

$2 \times 20 = \square$

$2 \times 24 = \square$

2) Work out the following multiplication questions:

a)

		T	O	
		2	4	
	×		2	

b)

		T	O	
		4	4	
	×		2	

3) Now do these ones in your book:

A)  $31 \times 3 =$

C)  $42 \times 2 =$

4) One toaster costs £32.  
How much do 3 toasters cost?

