
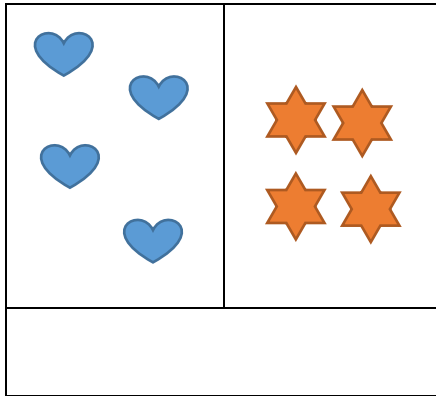



Tuesday 9<sup>th</sup> June 2020




LO: To make equal groups.



Are these groups equal or unequal?



Make these groups equal. Draw the objects in.



What number sentence could be the other side? Both sides must equal the same.

$2 + 2 = \underline{\hspace{2cm}}$

$6 + 1 = \underline{\hspace{2cm}}$

$4 + 2 = \underline{\hspace{2cm}}$

$3 + 2 = \underline{\hspace{2cm}}$

$9 + 0 = \underline{\hspace{2cm}}$