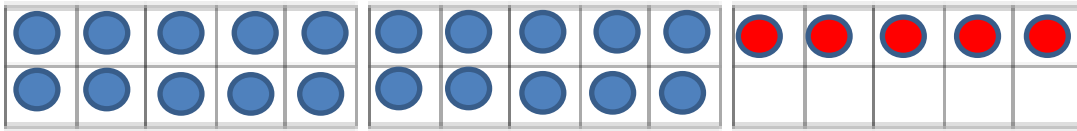


22.02.2021

LO: to be able to count to 50 and understand ten-frame representations up to 50.

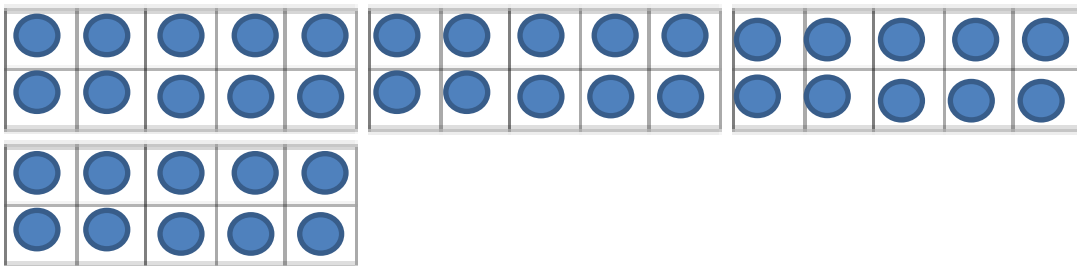
How many counters are there?



There are ___ counters.

There are ___ groups of ten and ___ ones.

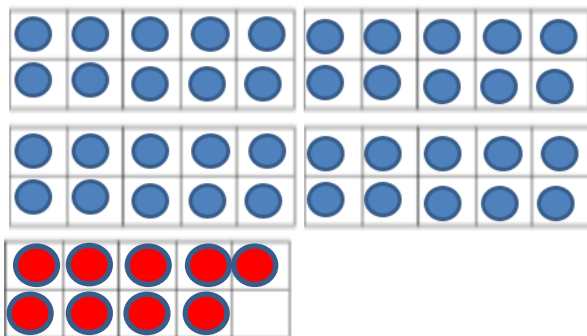
$$\underline{\quad} + \underline{\quad} + \underline{\quad} = \underline{\quad}$$



There are ___ counters.

There are ___ groups of ten and ___ ones.

$$\underline{\quad} + \underline{\quad} + \underline{\quad} + \underline{\quad} + \underline{\quad} = \underline{\quad}$$



There are ___ counters.

There are ___ groups of ten and ___ ones.

$$\underline{\quad} + \underline{\quad} + \underline{\quad} + \underline{\quad} + \underline{\quad} = \underline{\quad}$$

