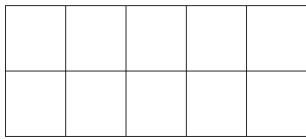
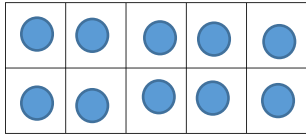
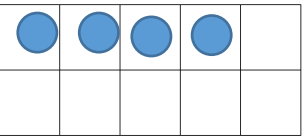
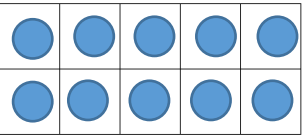


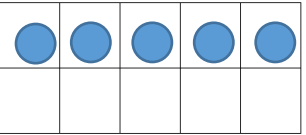
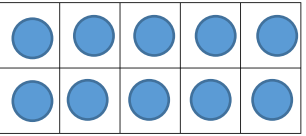
Can you find the missing numbers?



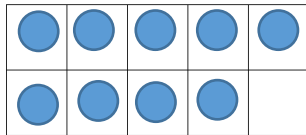
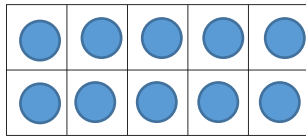
$$- = 9$$



$$- = 7$$



$$- = 8$$



$$- = 11$$

Baloo and his friends have filled
in this missing number



Who is right? Explain how you know.

A 2x10 grid of boxes. The top row has 10 boxes, all containing a blue dot. The bottom row has 10 boxes, with the first 8 boxes containing a blue dot and the last 2 boxes empty. To the right of the grid is a subtraction equation: a minus sign, a blue starburst shape, an equals sign, and the number 12.
$$\begin{array}{|c|c|c|c|c|c|c|c|c|c|} \hline \bullet & \bullet & \bullet & \bullet & \bullet & \bullet & \bullet & \bullet & \bullet & \bullet \\ \hline \bullet & \bullet & \bullet & \bullet & \bullet & \bullet & \bullet & \bullet & \bullet & \bullet \\ \hline \bullet & \bullet & \bullet & \bullet & \bullet & \bullet & \bullet & \bullet & & \\ \hline \bullet & \bullet & \bullet & \bullet & \bullet & \bullet & \bullet & \bullet & & \\ \hline \end{array} - \text{starburst} = 12$$


Baloo: 5

Tiger: 7

Snake: 8

I know _____ is right because