

End of Maths Topic Questions.

Question 1

There are 7 birds in a tree



5 more fly into the tree.



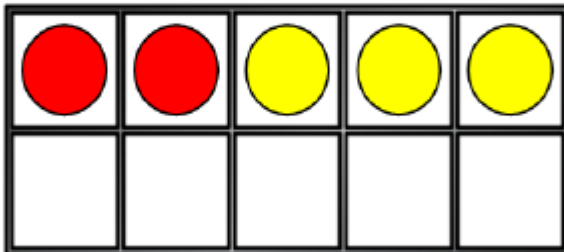
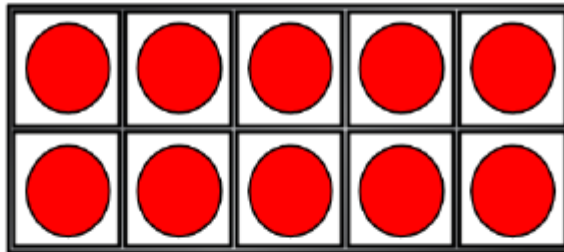
How many birds are there now?

There are ____ birds now.

Question 2

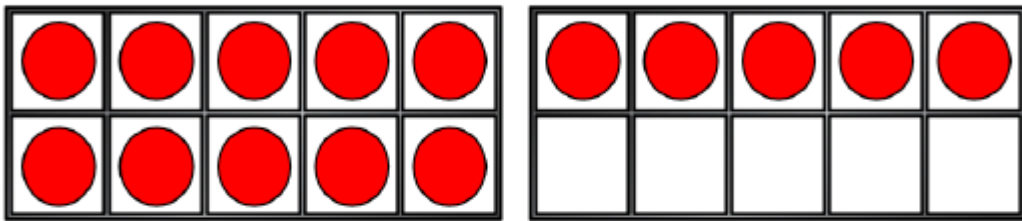
Complete the number sentence.

$$12 + 3 = \square$$

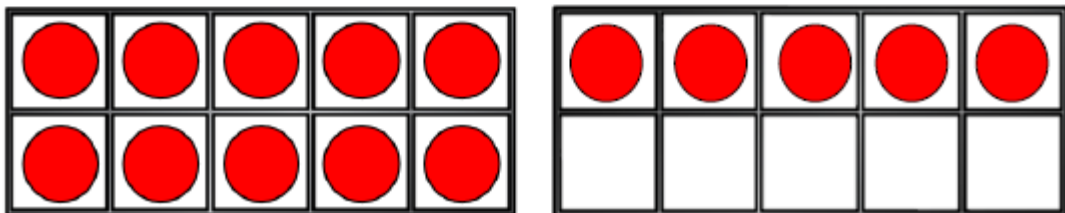


Question 3

Work out $15 + 4 = \square$

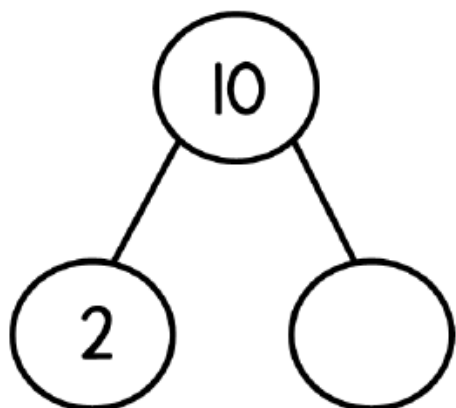


Work out $15 - 4 = \square$

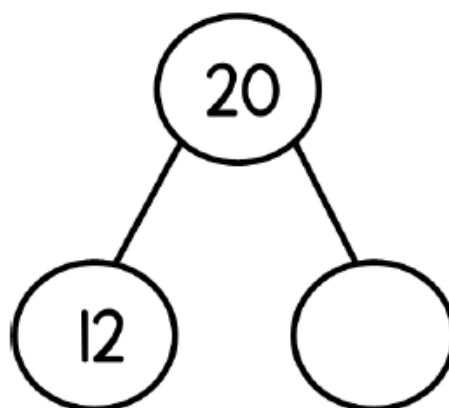


Question 4

Complete the part-whole models.



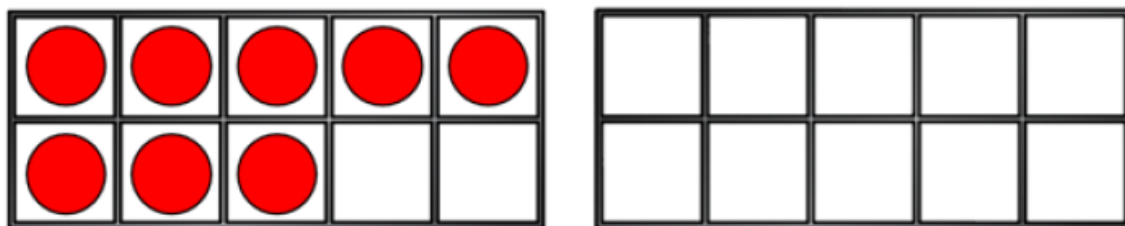
$$10 = 2 +$$



$$20 = 12 +$$

Question 5

Mo has 8 counters



He adds 6 more counters.

How many counters does he have now?

Mo has ____ counters now

Question 6

Eva has 2 bags of marbles.
She has 20 marbles altogether.
Circle the bags she has.



Question 7

Work out $6 + 9 =$

Challenge Question 1

Join the number sentences which have the same total. One has been done for you.

$15 + 3$	$9 + 10$
$10 + 9$	$11 + 5$
$12 + 4$	$13 + 5$



Challenge Question 2

Complete the number sentences.

$$15 + 3 < 15 + \square$$

$$15 + \square < 19 + \square$$