


LO: To use arrays to solve multiplication questions.

1) Match the arrays to the correct multiplication number sentence



$$3 \times 3$$




$$2 \times 3$$



$$2 \times 2$$

1. Can you work out the **multiplication** sentence that these arrays are showing?



___ equal groups of ___

$$\text{___} \times \text{___} = \text{___}$$



___ equal groups of ___

$$\text{___} \times \text{___} = \text{___}$$

2. Can you draw these **arrays** neatly in your books and work out the answer?

2 equal groups of 4 =

5 equal groups of 3 =

$2 \times 5 =$

$3 \times 7 =$

3. Draw arrays to solve the questions.

There are 6 monkeys. Each monkey has 3 bananas. How many bananas are there in total? ___



True or false?

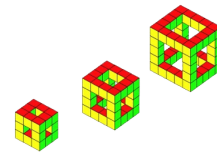
$$3 \times 5 < 6 \times 4$$

I think it is _____ because...

The total is less than 16.

Can you write down all the possibilities that the array could be?

_____ x _____ = _____



VISUALISATION

