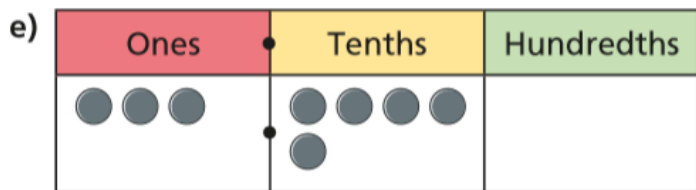
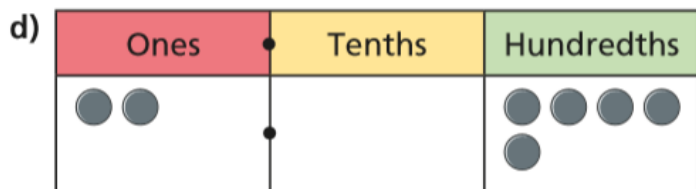
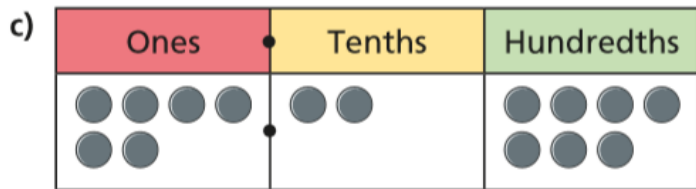
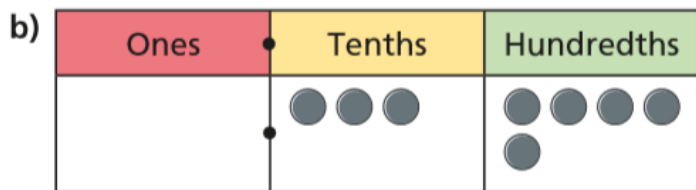
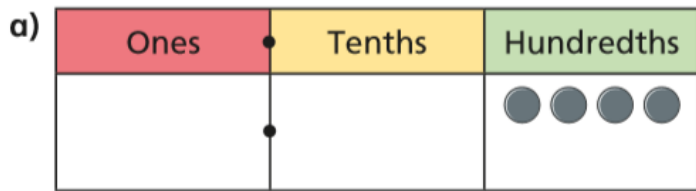


08/05/2020

Maths: Hundredths

1.) Write the decimal that is represented in each PV chart.



3.) Complete the sentences

a) 2 tenths can be exchanged for hundredths.

b) 7 tenths can be exchanged for hundredths.

c) 7 tenths and 4 hundredths is equivalent to hundredths.

d) tenths and hundredths is equivalent to 26 hundredths.

2.) Complete the Part- Whole models

