


Thursday 30<sup>th</sup> April 2020


## Fractions and Decimals

1.) Shade squares in your book to represent each amount

a) 7 tenths



b)  $\frac{4}{10}$



c) 0.3




2.) What fractions and decimals do these represent?

	Bar model	Fraction	Decimal
A			
B			
C			
D			

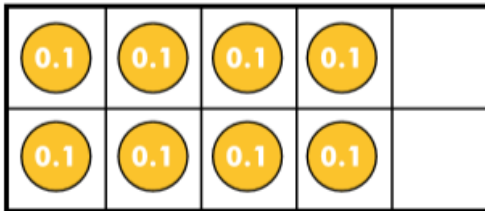
3.) Write down the value of A, B and C as BOTH a fraction and a decimal




 = 0.1 or one tenth

4.) This picture shows Eight tenths in 4 different ways. Draw six tenths using each representation.

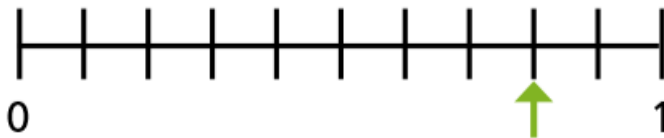
**A**



**C**



**B**



**D**

