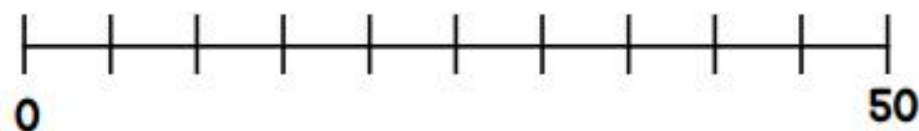
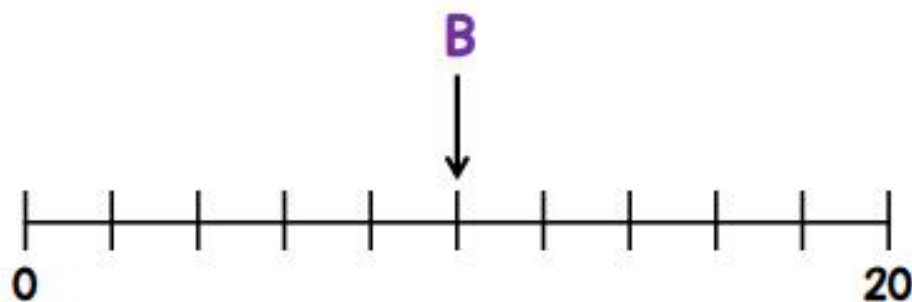
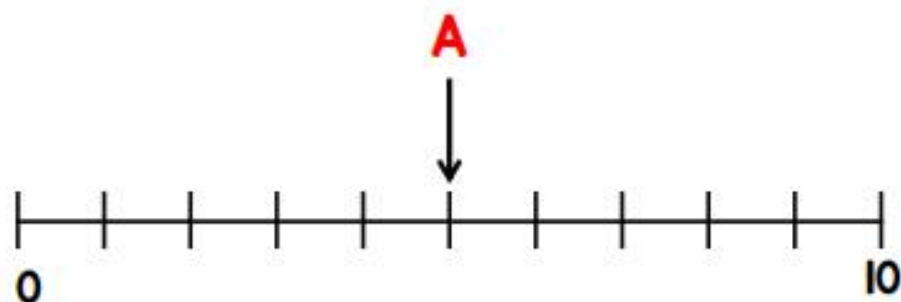


Problems of the Day 2020


Day
12

- 1 Given that $A + B = C$
Draw an arrow pointing to C



- 2 Amir has a box of 50 counters.
12 of the counters are red.
17 of the counters are blue.
The rest of the counters are yellow.
Which coloured counter are there more of?

3



When I share my stickers between me and my 4 friends, we all get 7 stickers.

How many stickers did Lisa share out?